

Kindergarten Summer Mathematics Review #1

Name: _____

1-1

- A. Color the penny blue.
- B. Put an X on the quarter.
- C. Color the dime red.
- D. Circle the nickel.

1-2 Fill in the missing numbers to 30:

1			4	5			8	9	
---	--	--	---	---	--	--	---	---	--

Kindergarten Summer Mathematics Review #3

Name:

3-1 Where

Kindergarten Summer Mathematics Review #4

Name: _____

4-1 10 pennies is equal to _____ dime(s).

4-2 Nicholas has 5 red balloons and 3 blue balloons. How many balloons does he have

4-3 Circle the list that shows the days of the week.

Monday
Tuesday
Wednesday
Thursday
Friday
Saturday
Sunday

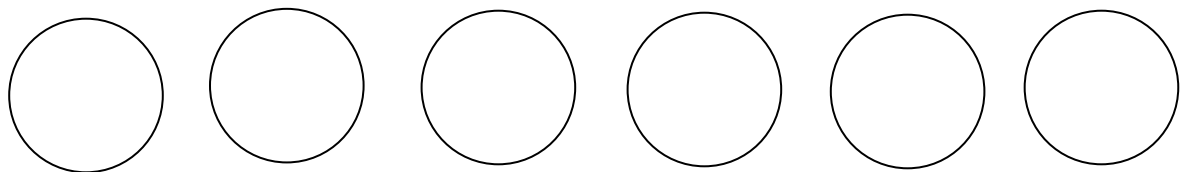
January July
February August
March September
April October
May November
June December

Kindergarten Summer Mathematics Review #5

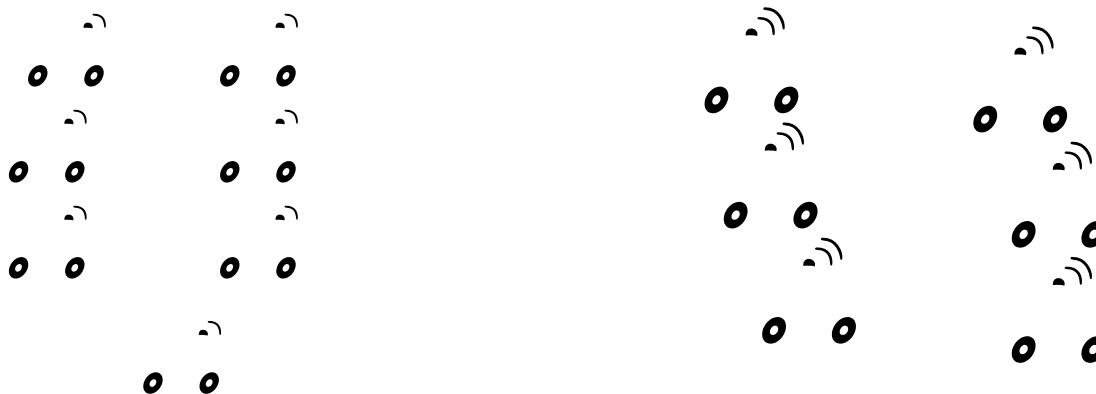
Name: _____

5-1 Amelia has 5 balloons. Some are red and some are blue. How many can be red and how many can be blue? Draw a picture to show your thinking.

5-2 Sarah and Marcus are sharing 6 cookies equally. Circle how many cookies Sarah will get.



6-3 Circle the set that has fewer.



Kindergarten Summer Mathematics Review #7

Name: _____

7-1 Draw a repeating pattern using squares and triangles.

7-2 Draw a line from the coin to how many pennies it is worth.

1 penny

5 pennies

10 pennies



25 pennies

7-3 Circle the number in the box that is missing below when counting by fives.

5 10 15 _____ 25

20	10	40
----	----	----

Kindergarten Summer Mathematics Review #8

Name:

8-1 Count each shape. Record how many of each you see.

9-3 Cross out 3 flowers.



There are _____ flowers left.

Kindergarten Summer Mathematics Review #10

Name: _____


10-1 Ginger the dog has 5 bones in her dog bowl. She eats 2 of them and buries one in the backyard. How many dog bones does she have left? Draw a picture to show your thinking.

10-2 Look at the number pattern. Fill in the missing numbers.

5, _____, 15, 20, 25, _____, _____, 40, _____, 50, 55,
_____, _____, _____, 75, _____, _____, 90, _____, _____

10-3 Put an X on all the quarters.



1-1	See student work	6-1	See student work
1-2	See student work	6-2	5, 10, 15, 20
		6-3	Police cars
2-1	5, 3, 8 altogether	7-1	Check student work
2-2	Oval, Check student work.	7-2	Check student work
2-3	Hearts	7-3	20
3-1	Box with rectangles	8-1	6 triangles, 4 rectangles, 4 circles
3-2	5 pencils, 3 books	8-2	6 pencils
3-3	Check student work, 3 triangles	8-3	$2 + 4 = 6$
4-1	1 dime	9-1	A
4-2	8 balloons; check student work	9-2	
4-3	The first list	9-3	4 flowers
5-1	Check student work, should be combinations that make 5	10-1	Check student work, 2 bones left
5-2	Any 3 cookies circled	10-2	10, 30, 35, 45, 60, 65, 70, 80, 85, 95, 100
5-3	9 pennies	10-3	4 quarters

Student's Signature (optional) _____ Date _____